




Shape Numbers 1



Fill in the shapes with numbers from the sign.
Same shapes have same numbers.
Different shapes have different numbers.






1. Write the numbers in the shapes.

A.  +  = 10


B.  +  = 16

C.  ÷  = 6

D.  ×  = 40 + 

E.  +  =  + 

F.  ÷  = 2

2. How did you figure out the number for the  ?
