











Multiplication Mix-Up 1

The triangles in the multiplication table contain the factors, and the squares contain the products.

Use each factor 3, 4, 5, 6, and 7 once across the top and once down the left side.

- Complete the multiplication table.

\times					
					
		35			15
					21
				12	
	36				

- How did you figure out the number in the shaded triangle?
