

Name _____

Round and Round

In each number below, circle the number that tells you if the number should round up or stay the same. Round each number.

A. 10

85(6) _____

47 _____

293 _____

64 _____

327 _____

B. 100

467 _____

821 _____

299 _____

1,371 _____

5,614 _____

C. 1,000

5,764 _____


8,213 _____

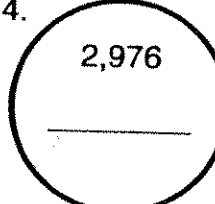
9,621 _____

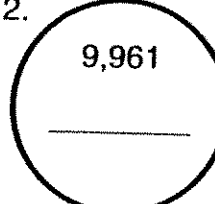
2,473 _____

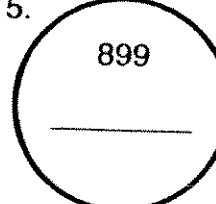
1,121 _____

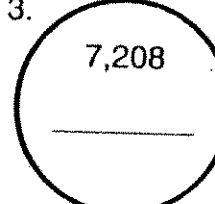
D. Round to the nearest thousand. Color the balls when the numbers round up.


1.  4,651

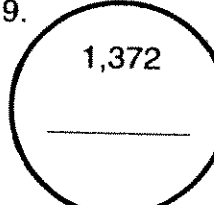
4.  2,976


2.  9,961

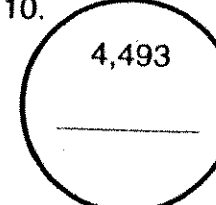
5.  899

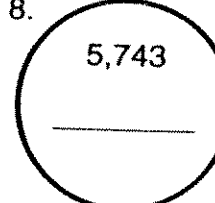
3.  7,208

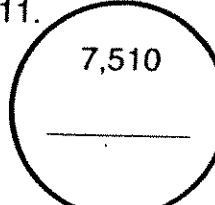
6.  3,479

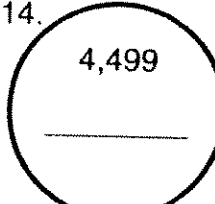
9.  1,372

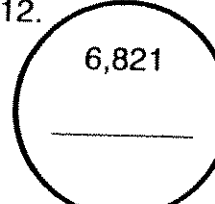
7.  6,411

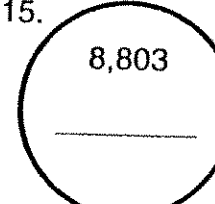
10.  4,493

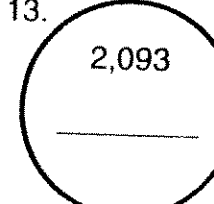
8.  5,743

11.  7,510

14.  4,499

12.  6,821

15.  8,803

13.  2,093

E. Answers for tens need to end in _____ zero(s).

Those for the nearest hundred end in _____ zero(s).

Answers to the nearest thousand end in _____ zero(s).