





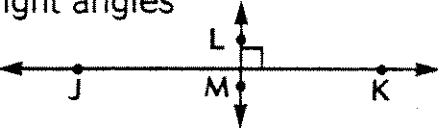


Name _____

Points, Lines, Segments, Rays, and Angles R 11-2

Term	Description	Name
point	one exact place in space 	point A
line	a collection of points that goes on and on in two directions 	line AB
line segment	part of a line—it has two endpoints 	line segment RS
parallel lines	lines in the same flat surface, or plane, that never meet 	lines BC and DE are parallel
intersecting lines	lines that cross at a point. 	lines RS and TU intersect
angle	two rays that have the same endpoint, or vertex 	angle B or angle ABC
perpendicular lines	two lines that cross each other at right angles 	lines LM and JK are perpendicular

1. Name the line. _____



2. Name the right angle. _____

