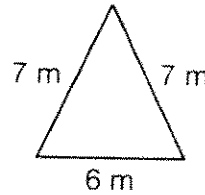
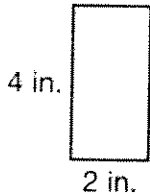


Name _____

**Practice
8-11**

Exploring Perimeter

Write a number sentence to find the perimeters of each polygon.
Then write the perimeter.



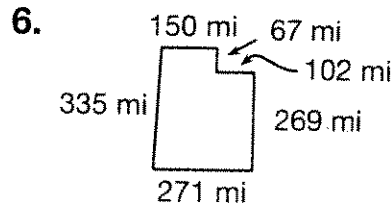
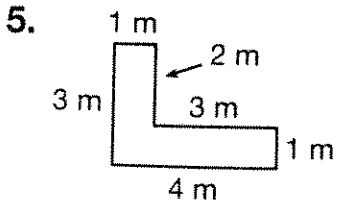
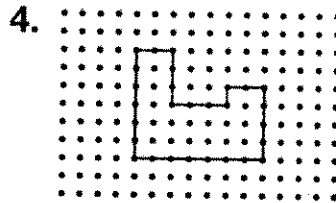

1. Number sentence:

Perimeter: _____

2. Number sentence:

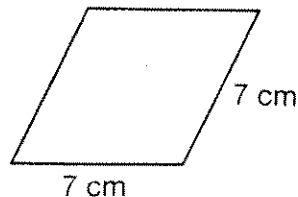
Perimeter: _____

Find the perimeter of each polygon.



7. A rectangle has sides of 22 and 44 meters.
What is the perimeter of the rectangle? _____

8. This rhombus has the measurements shown.
a. What are the lengths of the missing sides?



b. What is the rhombus' perimeter?
