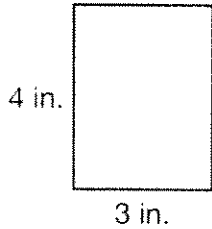


Name _____

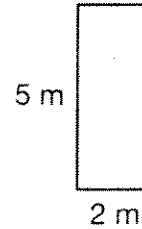
Exploring Areas of Rectangles

Write a number sentence to find the area of each rectangle.
Then write the area.



1. Number sentence:


Area: _____




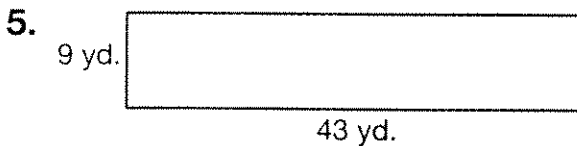
2. Number sentence:

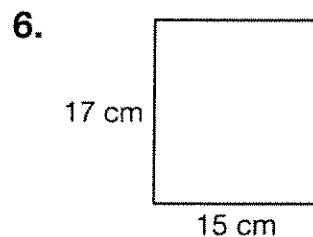
Area: _____

Find the area of each rectangle.









7. The area of a square is 16 square centimeters.
What is its length? _____

8. The area of a rectangle is 24 square meters
and its length is 3 meters. What is its width? _____

9. The area of a rectangle is 12 square feet. List 2 possible
measurements for its length and width.
