


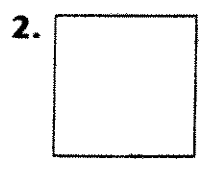
Name _____

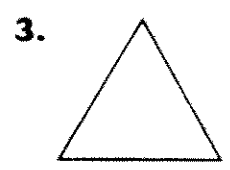
Explore: Polygons

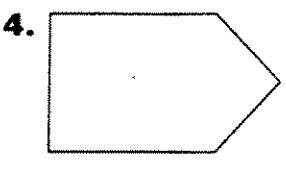
P 11-1

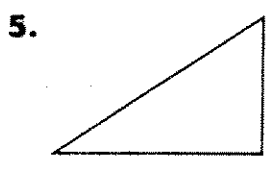
Name each polygon. Write the number of sides and vertices.

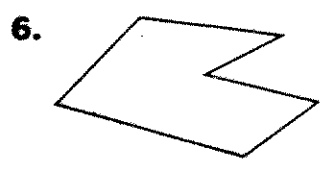




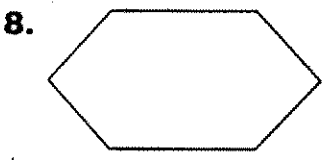


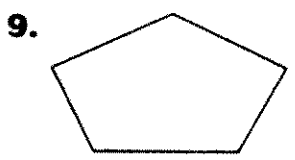












Make each polygon on your geoboard. Draw the shape you make. Then name the polygon.

- 10. 3 sides
 - 1 square corner
 - 2 sides the same length

- 11. 4 sides
 - 2 sides short
 - 2 sides long

- 12. 8 sides
 - all sides different lengths
