

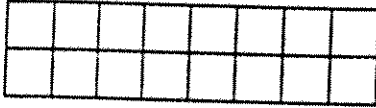
Name _____

Area

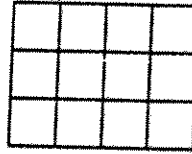
P 11-11

Find the area of each region. Tell the number of square units.

1.



2.

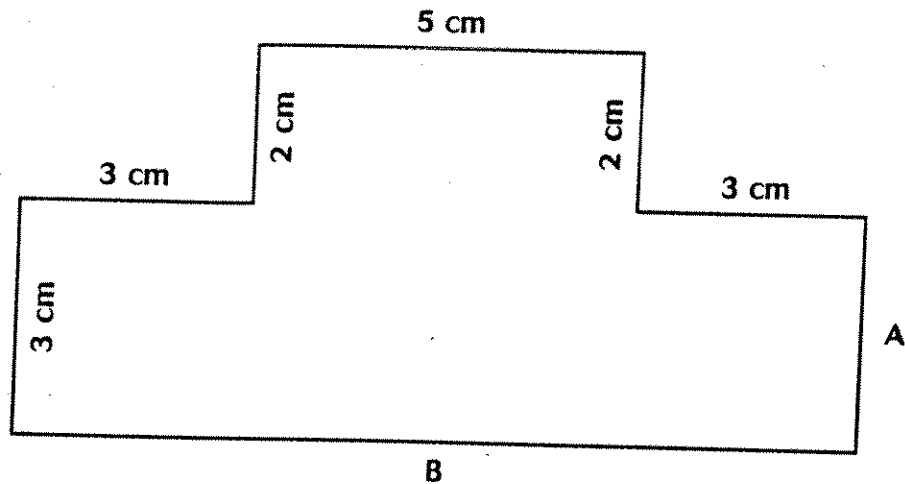


Use the figure at the right.

3. What is the length of side A?

4. What is the length of side B?

5. Find the total area.



Use grid paper.

6. Draw a rectangle that has an area of 21 square units and a perimeter of 20 units.

Solve.

7. The area of a rectangle is 32 square inches. The length of one of the sides is 4 inches. What is the perimeter of the rectangle?

8. The perimeter of a square is 48 meters. What is its area?
