

Name _____

Area

R 11-11

The **area** of a figure is the number of square units needed to cover the figure. The area of a figure is measured in square units. Each unit is shaped like a square.

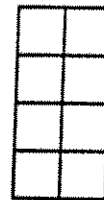
You can find area by counting square units.

Count the square units inside this figure.

There are 2 square units in each row.

There are 4 rows.

There are 8 square units in all.

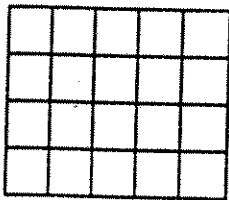


The area of the rectangle is **8 square units**.


$$2 \times 4 = 8$$

Count the number of square units to find the area.

1.



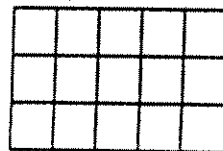
2.




3.



4.



5.



6.

